

Read the clock.

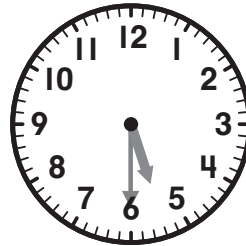
Write the **half-hour** time on the digital clock.

1.


 :

hour : minute

2.



 :

hour : minute

3.


 :


4.


 :

5.


 :


6.


 :

7.


 :


8.


 :

9.


 :

10.


 :



Ring the clock that shows the correct time.

Cross out the clock that shows the wrong time.

11.




7:30



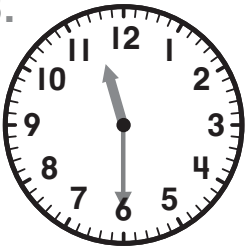
12.



4:30




13.



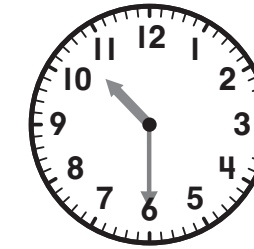
12:30



14.




9:30



15. Look at the hour hand Puzzled Penguin drew.

1:30



Am I correct?

16. Help Puzzled Penguin.

1:30

