




► Math and the Grocery Store

Use the pictures to solve.

1. How many potatoes are there?



potatoes

2. How many cartons of milk are there?



cartons of milk

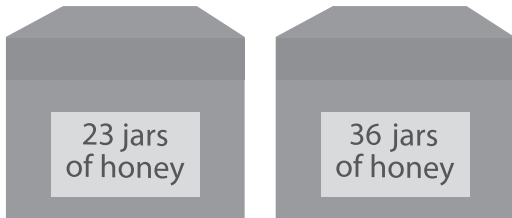
3. 20 cartons of milk spill.
How many cartons of milk are there now?

cartons of milk



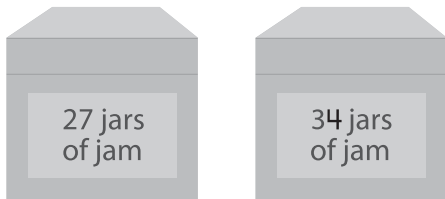
Use the pictures to solve.

4. How many jars of honey are there?



jars of honey

5. How many jars of jam are there?



jars of jam

6. Compare the number of jars of honey to the number of jars of jam. Write the comparison 2 ways.

○

○

