



Picnic Time!

Directions: Draw pictures to solve the problem.


Instrucciones: Haz dibujos para resolver el problema.



Jamie's Plate



Jackson's Plate



Dad's Plate

Jamie and Jackson went on a picnic with Dad. Dad put 2 hot dogs on Jamie's plate and 2 hot dogs on Jackson's plate. He put one hot dog on his own plate. How many hot dogs were on the 3 plates?

Talk About It!
¡Hablar de ello!

What addition number sentence could you make for this problem?
¿Qué oración numérica de sumas podrías hacer para este problema?