



Read the clock.

Write the time on the digital clock.

1.



_____ : _____


2.




_____ : _____

Draw the hands to show the time.

3. 8:30

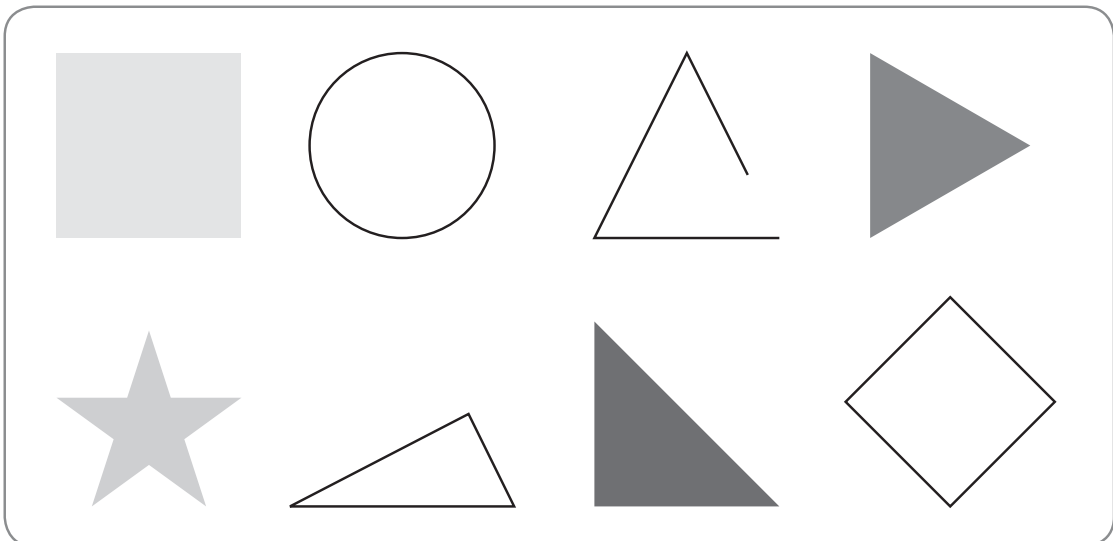


4. 3:00



5. Which shapes are NOT triangles?

Draw an X on each one.





Name _____

6. Is the shape a square? Choose Yes or No.




Yes No




Yes No

Draw a line to show halves.
Color one half of the shape.

7.




8.




Draw lines to show fourths.
Color one fourth of the shape.

9.



10.





11. Draw a line from the shape to its name.




•

• rectangular prism



•

• sphere



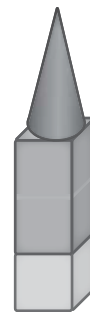
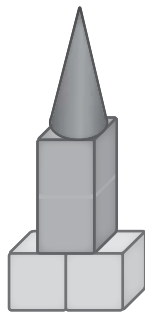

•

• cylinder

12. Choose the shapes used to make the new shape.



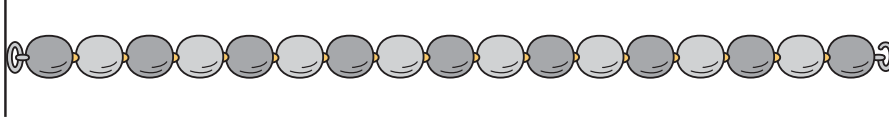
13. Choose the shape used to make the larger shape.





Name _____

14. Measure in paper clips.



How long? paper clips

15. Eli has this crayon and this pencil.



Sam gives him an eraser that is shorter than the crayon.
Is the eraser shorter than the pencil? Explain.
